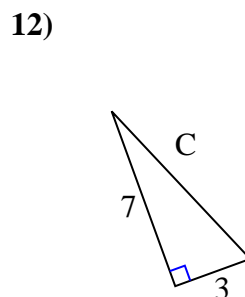
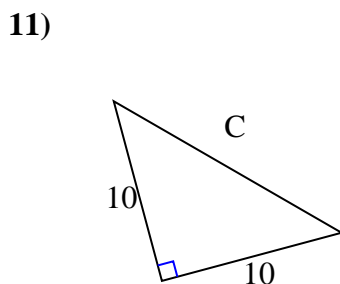
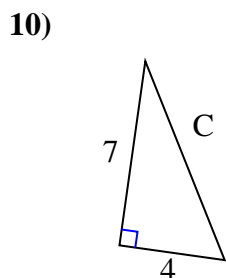
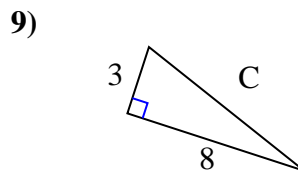
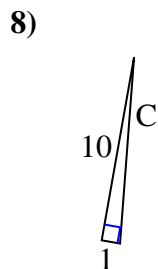
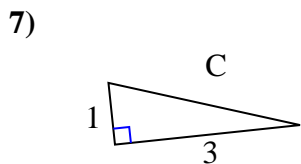
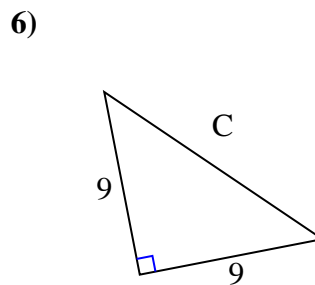
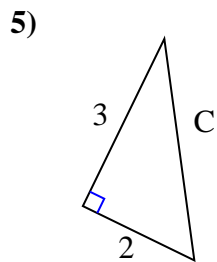
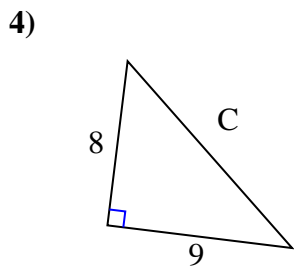
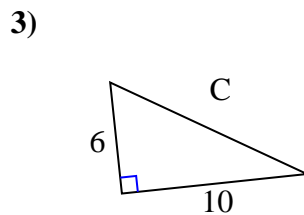
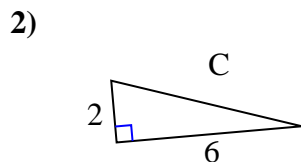
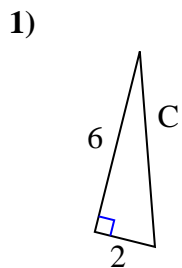




Find the value of 'C' round your answer to the nearest hundredth.

Answers

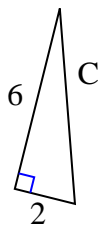


1. \_\_\_\_\_
2. \_\_\_\_\_
3. \_\_\_\_\_
4. \_\_\_\_\_
5. \_\_\_\_\_
6. \_\_\_\_\_
7. \_\_\_\_\_
8. \_\_\_\_\_
9. \_\_\_\_\_
10. \_\_\_\_\_
11. \_\_\_\_\_
12. \_\_\_\_\_



Find the value of 'C' round your answer to the nearest hundredth.

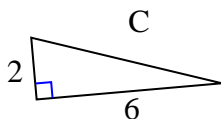
1)



$$36 + 4 = 40$$

$$\sqrt{40} = 6.32$$

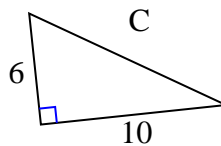
2)



$$4 + 36 = 40$$

$$\sqrt{40} = 6.32$$

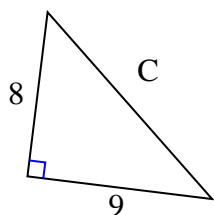
3)



$$36 + 100 = 136$$

$$\sqrt{136} = 11.66$$

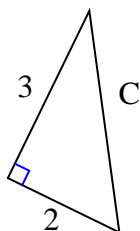
4)



$$64 + 81 = 145$$

$$\sqrt{145} = 12.04$$

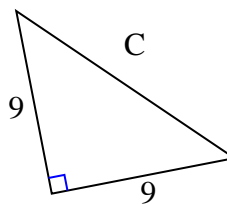
5)



$$9 + 4 = 13$$

$$\sqrt{13} = 3.61$$

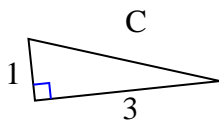
6)



$$81 + 81 = 162$$

$$\sqrt{162} = 12.73$$

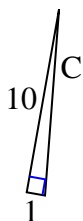
7)



$$1 + 9 = 10$$

$$\sqrt{10} = 3.16$$

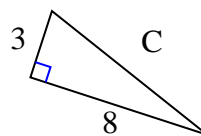
8)



$$100 + 1 = 101$$

$$\sqrt{101} = 10.05$$

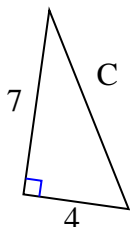
9)



$$9 + 64 = 73$$

$$\sqrt{73} = 8.54$$

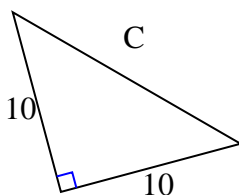
10)



$$49 + 16 = 65$$

$$\sqrt{65} = 8.06$$

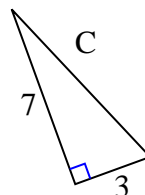
11)



$$100 + 100 = 200$$

$$\sqrt{200} = 14.14$$

12)



$$49 + 9 = 58$$

$$\sqrt{58} = 7.62$$

Answers1. 6.322. 6.323. 11.664. 12.045. 3.616. 12.737. 3.168. 10.059. 8.5410. 8.0611. 14.1412. 7.62